



Visual Addition Worksheet


Child's Name: _____ Age: _____ Date: _____


Encourage child to use the image to fill in the blanks of the addition problems below.


 _____ + _____ = _____


 _____ + _____ = _____

 _____ + _____ = _____

 _____ + _____ = _____

 _____ + _____ = _____

 _____ + _____ = _____

 _____ + _____ = _____

 _____ + _____ = _____

- | | | | | | | | | | |
|---|---|---|---|---|---|---|---|---|---|
| 0 | 1 | 2 | 3 | 4 | 5 | 6 | 7 | 8 | 9 |
|---|---|---|---|---|---|---|---|---|---|