




# Visual Addition Worksheet

Child's Name: \_\_\_\_\_ Age: \_\_\_\_\_ Date: \_\_\_\_\_


Encourage child to use the image to fill in the blanks of the addition problems below.


 \_\_\_\_\_ + \_\_\_\_\_ = \_\_\_\_\_


 \_\_\_\_\_ + \_\_\_\_\_ = \_\_\_\_\_

 \_\_\_\_\_ + \_\_\_\_\_ = \_\_\_\_\_

 \_\_\_\_\_ + \_\_\_\_\_ = \_\_\_\_\_

 \_\_\_\_\_ + \_\_\_\_\_ = \_\_\_\_\_

 \_\_\_\_\_ + \_\_\_\_\_ = \_\_\_\_\_

 \_\_\_\_\_ + \_\_\_\_\_ = \_\_\_\_\_

 \_\_\_\_\_ + \_\_\_\_\_ = \_\_\_\_\_

- |   |   |   |   |   |   |   |   |   |   |
|---|---|---|---|---|---|---|---|---|---|
| 0 | 1 | 2 | 3 | 4 | 5 | 6 | 7 | 8 | 9 |
|---|---|---|---|---|---|---|---|---|---|