


Visual Division Worksheet


Child's Name: _____ Age: _____ Date: _____

Encourage child to use the image below to circle the sets of numbers and solve the division problems.




$$17 \div 3 = \underline{\quad}$$

$$\text{Remainder} = \underline{\quad}$$




$$24 \div 5 = \underline{\quad}$$

$$\text{Remainder} = \underline{\quad}$$



$$22 \div 8 = \underline{\quad}$$

$$\text{Remainder} = \underline{\quad}$$



$$18 \div 7 = \underline{\quad}$$

$$\text{Remainder} = \underline{\quad}$$