


Visual Division Worksheet


Child's Name: _____ Age: _____ Date: _____

Encourage child to use the image below to circle the sets of numbers and solve the division problems.




$$10 \div 3 = \underline{\quad}$$

$$\text{Remainder} = \underline{\quad}$$




$$21 \div 8 = \underline{\quad}$$

$$\text{Remainder} = \underline{\quad}$$



$$15 \div 4 = \underline{\quad}$$

$$\text{Remainder} = \underline{\quad}$$



$$13 \div 9 = \underline{\quad}$$

$$\text{Remainder} = \underline{\quad}$$