



Visual Division Worksheet

Child's Name: _____ Age: _____ Date: _____


Encourage child to use the image below to circle the sets of numbers and solve the division problems.




$$9 \div 9 = \underline{\quad}$$



$$15 \div 3 = \underline{\quad}$$



$$25 \div 5 = \underline{\quad}$$



$$21 \div 7 = \underline{\quad}$$