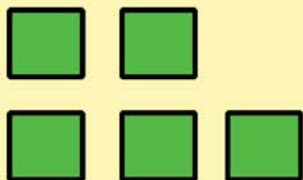



## Visual Division Worksheet

Child's Name: \_\_\_\_\_ Age: \_\_\_\_\_ Date: \_\_\_\_\_

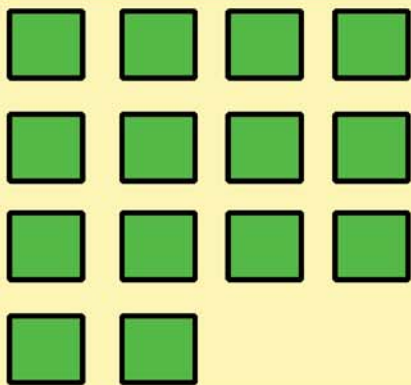
Encourage child to use the image below to circle the sets of numbers and solve the division problems.




$$5 \div 5 = \underline{\quad}$$



$$12 \div 4 = \underline{\quad}$$



$$14 \div 7 = \underline{\quad}$$



$$24 \div 8 = \underline{\quad}$$