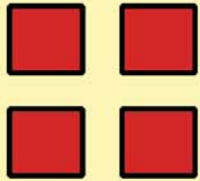



Visual Division Worksheet

Child's Name: _____ Age: _____ Date: _____


Encourage child to use the image below to circle the sets of numbers and solve the division problems.




$$4 \div 2 = \underline{\quad}$$



$$6 \div 1 = \underline{\quad}$$



$$16 \div 4 = \underline{\quad}$$



$$18 \div 9 = \underline{\quad}$$