



## Visual Multiplication Worksheet

Child's Name: \_\_\_\_\_ Age: \_\_\_\_\_ Date: \_\_\_\_\_


Encourage child to use the image to fill in the blanks of the multiplication problems below.




$$\underline{\quad} \times \underline{\quad} = \underline{\quad}$$



$$\underline{\quad} \times \underline{\quad} = \underline{\quad}$$



$$\underline{\quad} \times \underline{\quad} = \underline{\quad}$$



$$\underline{\quad} \times \underline{\quad} = \underline{\quad}$$